



Maris Stella High School (Primary)
Mathematics Mini Test 3, 2014
Length

Name: _____ ()

Total Marks: ____/20

Class: Primary 2 ()

Parent's Signature: _____

Date: ____ / ____ / 2014

Section A: 4 marks (4x1mark)

Choose the correct answer for each question and write 1, 2, 3 or 4 in the bracket provide.

1. The length of the _____ in the classroom is longer than 1 metre.

1) duster

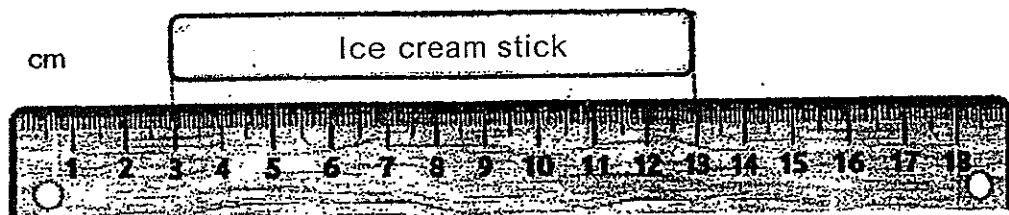
2) Math file

3) whiteboard

4) pupil's desk

()

2. The length of the ice-cream stick is _____ cm.



1) 10


2) 11

3) 13

4) 14

()

3.



The total length of the pencil and the paper clip is _____ cm.

1) 12

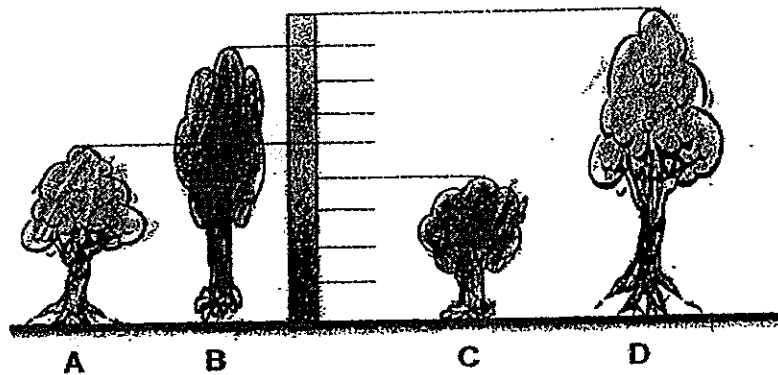
2) 16

3) 17

4) 18

()

4. Arrange the trees according to their heights starting from the tallest.



1) C, A, D, B

2) D, B, C, A

3) C, A, B, D

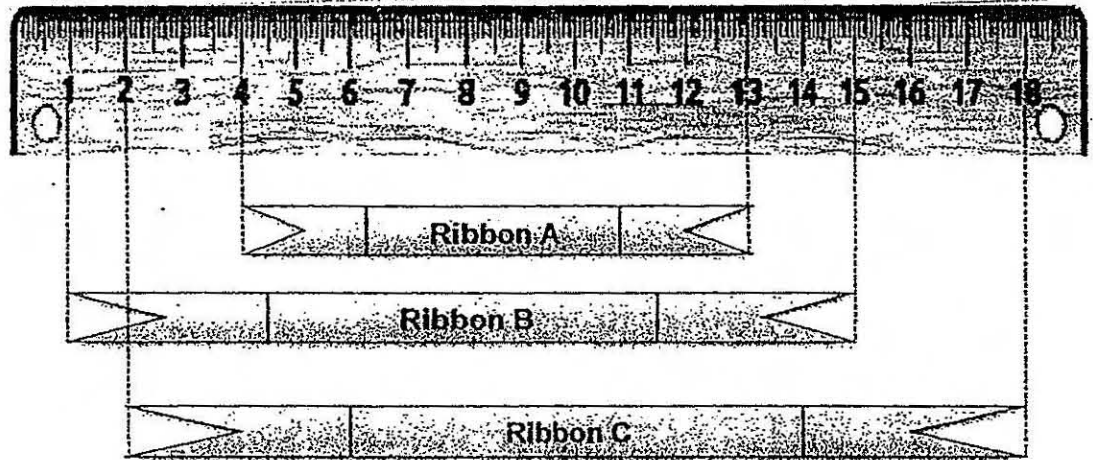
4) D, B, A, C

()

Section B: 10 marks (5x2 marks)

Fill in blank with the correct answer.

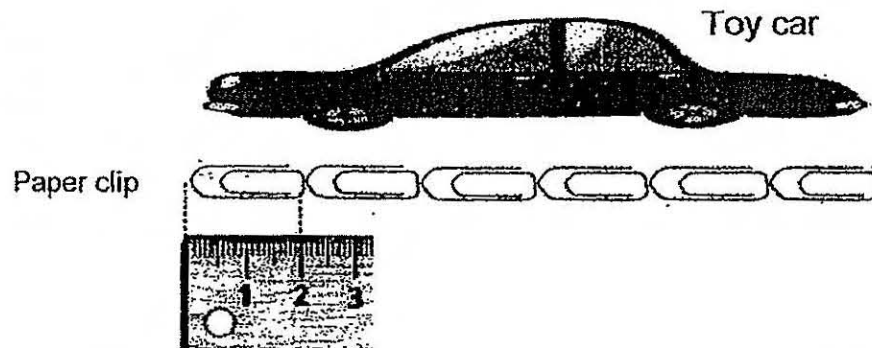
5.



a) Ribbon _____ is longer than Ribbon B.

b) Ribbon A is _____ cm long.

6.

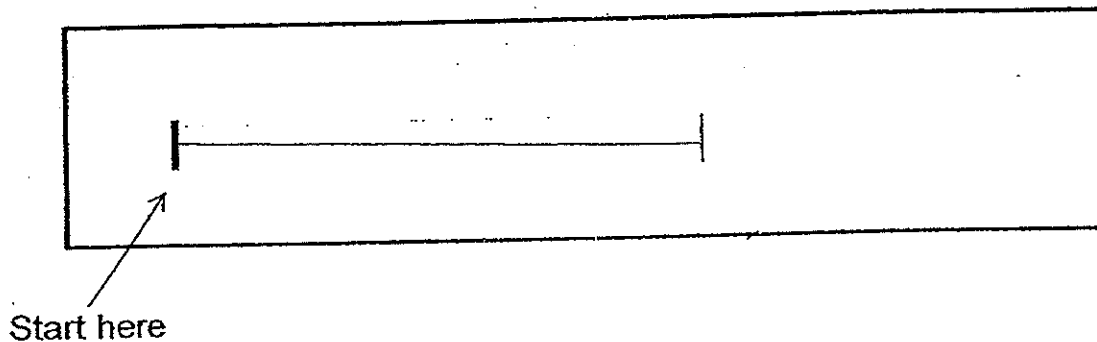


Tom has a broken ruler. He measured the length of a paper clip. He used the same type of paper clips to measure the length of a toy car

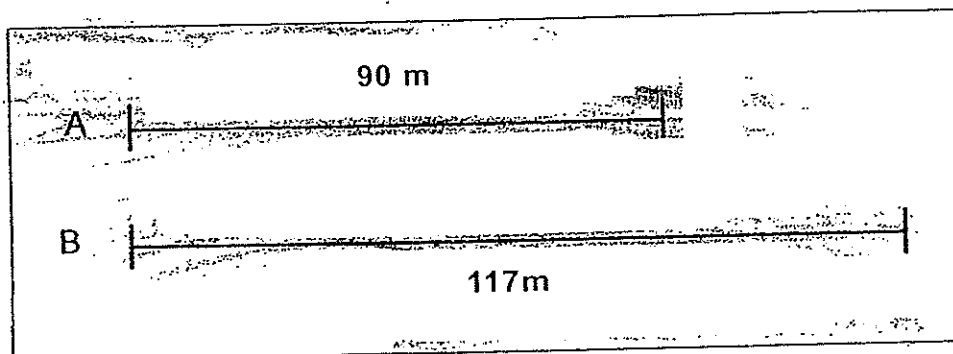
a) The paper clip is _____ cm long.

b) The toy car is _____ cm long.

7) Use your ruler to draw a line that measures 7cm in the box.



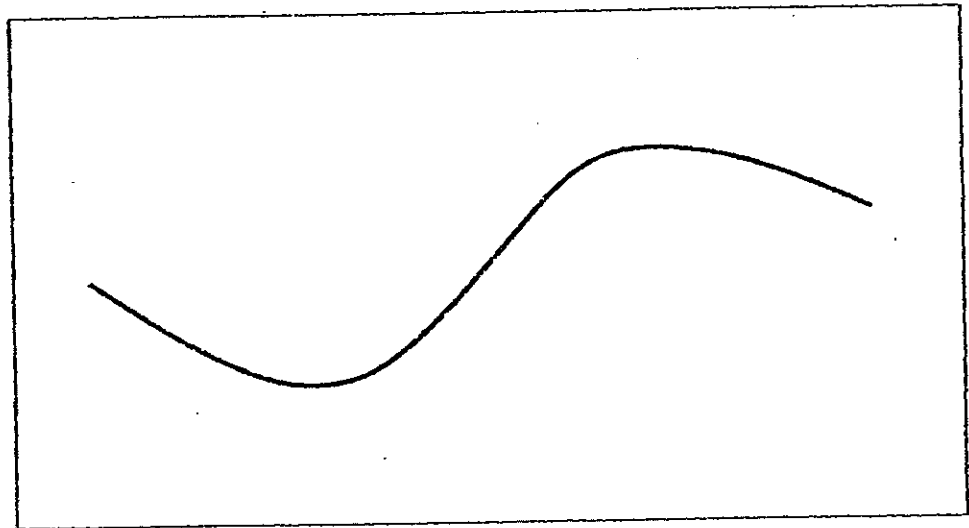
8) Look at the Line A and Line B inside the box.



a) Line _____ is longer than Line _____.

b) Line A is _____ m shorter than line B.

9) Use a piece of string and a centimetre ruler to find the length of the curved line in the box .



The line is about _____ cm long.

Section C: 6 marks (2x3 marks)

Solve the word problems. Show your number sentence, working and final answer clearly.

10) Johnson had to run 800 m around his school field.

After running 485 m, how much farther did he have to run?

He had to run _____ m.

11) Mrs Ram used 45 m of ribbon to tie up all her parcels.

She used 5 m of ribbon to tie up each parcel.

How many of such parcels did she have?

She had _____ parcels.

The End

YEAR: 2014

LEVEL: P2

SCHOOL: MARIS STELLA

SUBJECT: MATHEMATICS

SEMESTER: SA1

Mini test 3

Q1	Q2	Q3	Q4
3	1	2	4

5. a) C

b) 9

6. a) 2

b) 12

7. _____

8. a) B, A

b) 27

9. 12

10. $800 - 485 = 315$

11. $45 \div 5 = 9$

Mini test 2

Q1	Q2	Q3	Q4	Q5
3	2	2	3	3

6. $9+9+9+9 = 4 \times 9$

7. a) 9

b) 5

8. 15, 35

9. 6

10. $8 \times 4 = 32$

11. $12 \div 2 = 6$

12. 4

13. 8×5 _____ 4×10

8×3 _____ 4×6

14. 6

15. a) $16 \div 2, 2 \times 4$

b) $5 \times 2, 20 \div 2$

16. $20 \div 4 = 5$

$$17. 9 \times 3 = 27$$

$$18. 24 \div 4 = 6$$

$$19. a) 4 \times 2 = 8$$

$$b) 8 \times 5 = 40$$

$$20. 18 \div 3 = 6$$